

Tebalkan angka yang bergaris putus-putus kemudian ikutilah di bawahnya

1 satu	1	1	1	6 enam	6	6	6

2 dua	2	2	2	7 tujuh	7	7	7

3 tiga	3	3	3	8 delapan	8	8	8

4 empat	4	4	4	9 sembilan	9	9	9

5 lima	5	5	5	10 sepuluh	10	10	10

Tebalkan angka yang bergaris putus-putus kemudian ikutilah di bawahnya

11 sebelas	11	11	11
16 enam belas	16	16	16


12 dua belas	12	12	12
17 tujuh belas	17	17	17

13 tiga belas	13	13	13
18 delapan belas	18	18	18


14 empat belas	14	14	14
19 sembilan belas	19	19	19

15 lima belas	15	15	15
20 duapuluh	20	20	20


Angka 21-25




21




22



23



24



25

Sebutkan angka di sisi kiri
lalu tuliskan di sisi kanan

21

dua puluh satu

21

22

dua puluh dua

22

23

dua puluh tiga

23

24

dua puluh empat

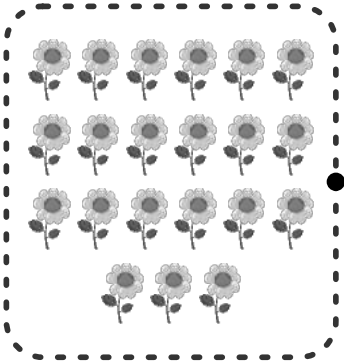
24

25

dua puluh lima


25

Cocokkan jumlah benda dengan angkanya






21

22




23

24




25

26





Cocokkan jumlah benda dengan angkanya




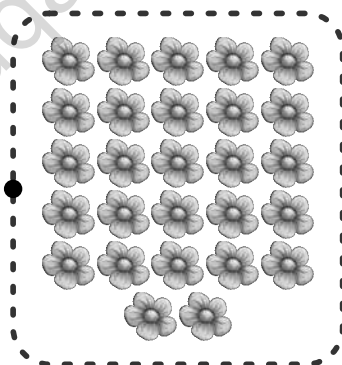
25

26




27

28

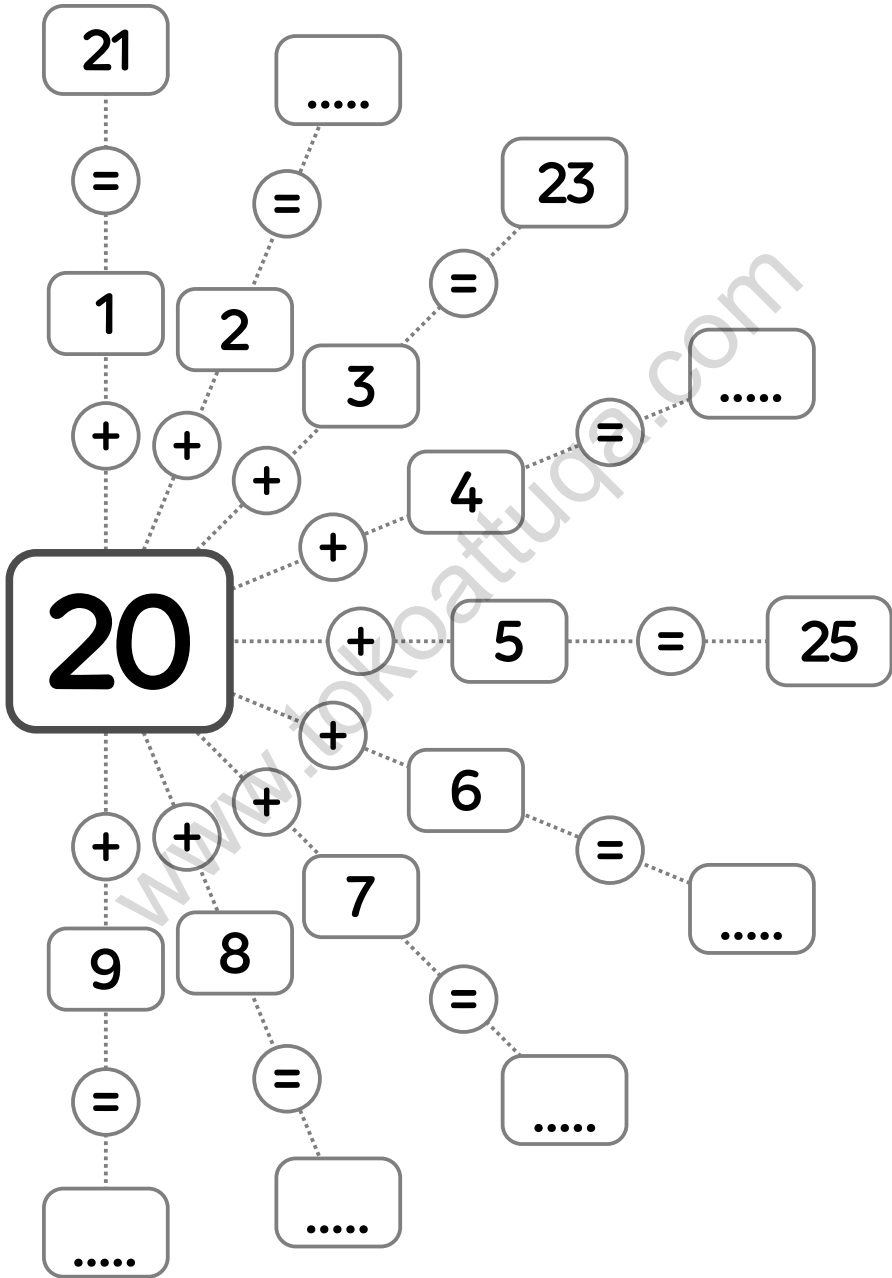


29

30



Perhatikan gambar dan penjumlahannya.
Isi kotak yang kosong.





Urutkan angka dari yang terbesar
hingga terkecil

30 → → 28 → → 26 →

..... → 29 → → → → 25

29 → → 27 → → 25 →

28 → → → → 24 → 23

..... → → 25 → 24 → →

26 → → 24 → → → 21